



Name _____

Date _____ # _____

2nd Grade Math Proficient Test 1 - <http://www.prepdog.org/2nd/2mp1.htm>

#	Answer	Show me how your brain works. Explain or sketch how you solved the problem.	Understanding
1.			 
2.			 
3.			 
4.			 
5.			 
6.			 
7.			 
8.			 
9.			 

10.			 
11.			 
12.			 
13.			 
14.			 
15.			 

Total correct: ____/15

Write an equation for the following: Wendy has 5 pencils, but she needs 10 pencils to pass out to all of the students.



Name _____

Date _____ # _____

2nd Grade Math Proficient Test 2 - <http://www.prepdog.org/2nd/2mp2.htm>

#	Answer	Show me how your brain works. Explain or sketch how you solved the problem.	Understanding
1.			 
2.			 
3.			 
4.			 
5.			 
6.			 
7.			 
8.			 
9.			 

10.			 
11.			 
12.			 
13.			 
14.			 
15.			 

Total correct: ____/15

Write an equation for the following: Alex would like to buy 3 candy bars. Each candy bar cost \$1.06. How much money will Alex need to buy all 3 candy bars?



Name _____

Date _____ # _____


2nd Grade Math Proficient Test 3 - <http://www.prepdog.org/2nd/2mp3.htm>

#	Answer	Show me how your brain works. Explain or sketch how you solved the problem.	Understanding
1.			 
2.			 
3.			 
4.			 
5.			 
6.			 
7.			 
8.			 
9.			 

10.			 
11.			 
12.			 
13.			 
14.			 
15.			 

Total correct: ____/15

Draw a picture that shows 6 divided by 6 equals 1.





Name _____

Date _____ # _____

2nd Grade Math Proficient Test 4 - <http://www.prepdog.org/2nd/2mp4.htm>

#	Answer	Show me how your brain works. Explain or sketch how you solved the problem.	Understanding
1.			 
2.			 
3.			 
4.			 
5.			 
6.			 
7.			 
8.			 
9.			 

10.			 
11.			 
12.			 
13.			 
14.			 
15.			 

Total correct: ____/15

Write an equation for the following: David threw six balls at a target. He picked up the balls and threw three of them at the target again. How many times did David throw?



Name _____

Date _____ # _____

2nd Grade Math Proficient Test 5 - <http://www.prepdog.org/2nd/2mp5.htm>

#	Answer	Show me how your brain works. Explain or sketch how you solved the problem.	Understanding
1.			 
2.			 
3.			 
4.			 
5.			 
6.			 
7.			 
8.			 
9.			 

10.			 
11.			 
12.			 
13.			 
14.			 
15.			 

Total correct: ____/15

Sketch a figure that shows a line of symmetry.






Name _____

Date _____ # _____

2nd Grade Math Proficient Test 6 - <http://www.prepdog.org/2nd/2mp6.htm>

#	Answer	Show me how your brain works. Explain or sketch how you solved the problem.	Understanding
1.			 
2.			 
3.			 
4.			 
5.			 
6.			 
7.			 
8.			 
9.			 

10.			 
11.			 
12.			 
13.			 
14.			 
15.			 

Total correct: ____/15

Draw a diagram that shows 12 square units.





Name _____

Date _____ # _____

2nd Grade Math Proficient Test 7 - <http://www.prepdog.org/2nd/2mp7.htm>

#	Answer	Show me how your brain works. Explain or sketch how you solved the problem.	Understanding
1.			 
2.			 
3.			 
4.			 
5.			 
6.			 
7.			 
8.			 
9.			 

10.			 
11.			 
12.			 
13.			 
14.			 
15.			 

Total correct: ____/7

Draw an object with a perimeter of 1, 3, 6, 2, and 5 inches. Label each side.





Name _____

Date _____ # _____

2nd Grade Math Proficient Test 8 - <http://www.prepdog.org/2nd/2mp8.htm>

#	Answer	Show me how your brain works. Explain or sketch how you solved the problem.	Understanding
1.			 
2.			 
3.			 
4.			 
5.			 
6.			 
7.			 
8.			 
9.			 

10.			 
11.			 
12.			 
13.			 
14.			 
15.			 

Total correct: ____/15

Sketch 3 different ways to show $\frac{1}{2}$ of an object or objects.



Name _____

Date _____ # _____

2nd Grade Math Proficient Test 9 - <http://www.prepdog.org/2nd/2mp9.htm>

#	Answer	Show me how your brain works. Explain or sketch how you solved the problem.	Understanding
1.			 
2.			 
3.			 
4.			 
5.			 
6.			 
7.			 
8.			 
9.			 

10.			 
11.			 
12.			 
13.			 
14.			 
15.			 

Total correct: ____/15

You have two jars full of gumballs, one has 180 the other has 299. Round to the nearest hundred for each number. Sketch a picture of two containers showing the difference between the two numbers. Shade or color the containers don't draw gumballs!



Name _____

Date _____ # _____


2nd Grade Math Proficient Test 10 - <http://www.prepdog.org/2nd/2mp10.htm>

#	Answer	Show me how your brain works. Explain or sketch how you solved the problem.	Understanding
1.			 
2.			 
3.			 
4.			 
5.			 
6.			 
7.			 
8.			 
9.			 

10.			 
11.			 
12.			 
13.			 
14.			 
15.			 

Total correct: ____/15

Draw a diagram that shows how 490,326 can be broken into hundred thousands, ten thousands, thousands, hundreds, tens, and ones.





Name _____

Date _____ # _____

2nd Grade Math Proficient Test 11 - <http://www.prepdog.org/2nd/2mp11.htm>

#	Answer	Show me how your brain works. Explain or sketch how you solved the problem.	Understanding
1.			 
2.			 
3.			 
4.			 
5.			 
6.			 
7.			 
8.			 
9.			 

10.			 
11.			 
12.			 
13.			 
14.			 
15.			 

Total correct: ____/15

Write an equation for the following: The zoo has 24 parrots. The zookeeper wants to put 5 parrots in each cage. How many cages will the zookeeper need?



Name _____

Date _____ # _____

2nd Grade Math Proficient Test 12 - <http://www.prepdog.org/2nd/2mp12.htm>

#	Answer	Show me how your brain works. Explain or sketch how you solved the problem.	Understanding
1.			 
2.			 
3.			 
4.			 
5.			 
6.			 
7.			 
8.			 
9.			 

10.			 
11.			 
12.			 
13.			 
14.			 
15.			 
16.			 
17.			 
18.			 

Total correct: ___/18

Draw 4 apples and 6 cherries, now show the ratio.



<http://www.prepdog.org/2nd/2mp12.htm>

Prepdog.org- copyright 2014